


AD:
SOYAD:

ONLUK BİRLİK

1. SINIF

 Aşağıdaki sayıları örnekteki gibi onluk ve birliklerine ayıralım.
Altına da okunuşunu yazalım.

18

onluk	birlik
1	8
on sekiz	

10

onluk	birlik

12

onluk	birlik

15

onluk	birlik

13

onluk	birlik

17

onluk	birlik

19

onluk	birlik

14

onluk	birlik

16

onluk	birlik

11

onluk	birlik

9

onluk	birlik

5

onluk	birlik

7

onluk	birlik

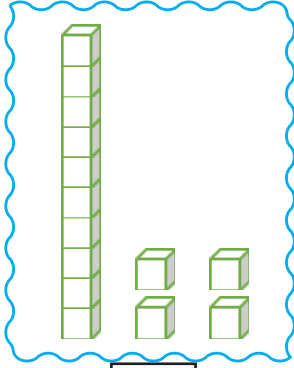
4

onluk	birlik

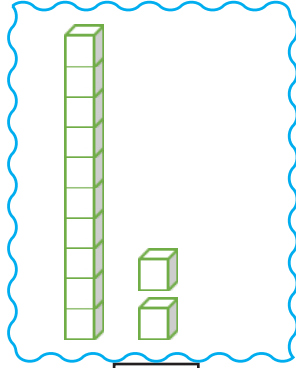
6

onluk	birlik

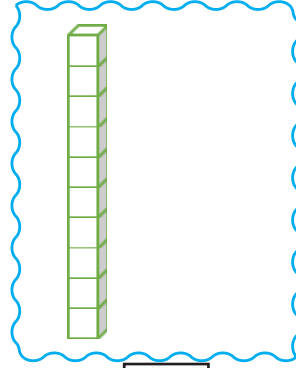
🎀 Onluk ve birlik taban bloklarını kullanarak örnekteki gibi hangi sayıya denk geldiğini yazalım.



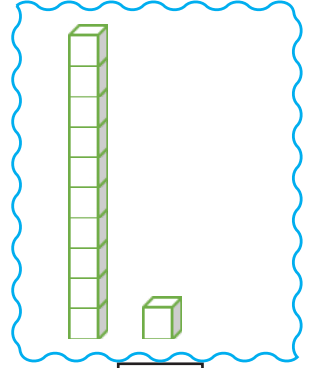
14



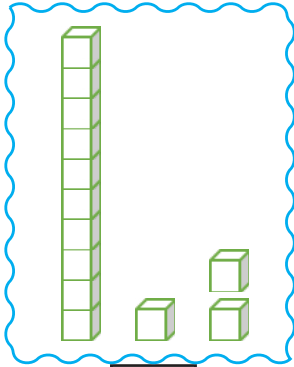
.....




.....



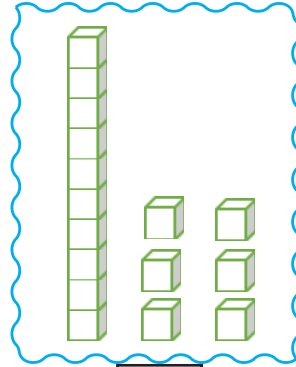
.....



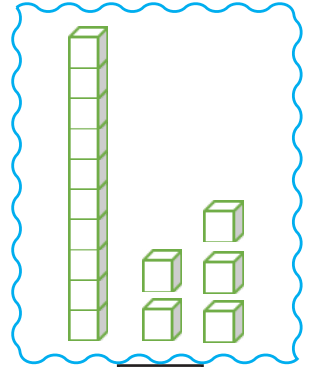
.....



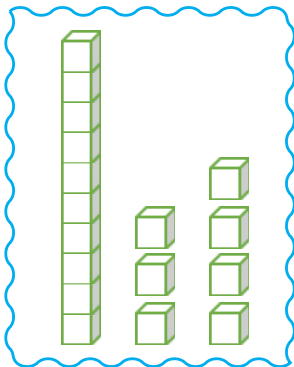
.....




.....



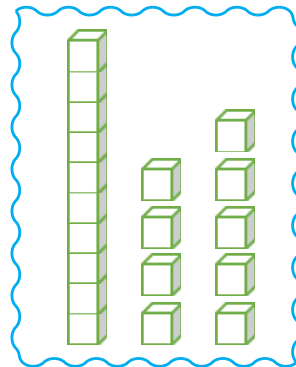
.....



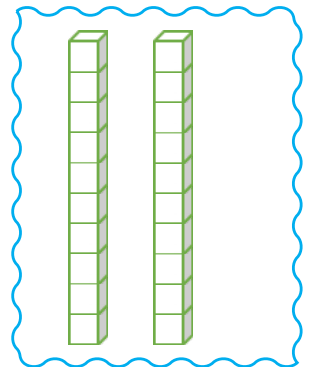
.....



.....



.....



.....